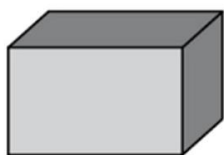




New Maths GCSE: G12 - Names of 3D Shapes

Name:.....

Date:.....



What is the name of this shape?

- | | | | |
|-------------------------|--------|-------------------------|-----------|
| <input type="radio"/> A | Cuboid | <input type="radio"/> B | Rectangle |
| <input type="radio"/> C | Cube | <input type="radio"/> D | Square |

Correct Answer: A B C D

Explanation:

.....

.....

.....

.....

.....

.....



What is the name of this shape?

- | | | | |
|-------------------------|--------|-------------------------|------------|
| <input type="radio"/> A | Sphere | <input type="radio"/> B | Hemisphere |
| <input type="radio"/> C | Cone | <input type="radio"/> D | Cylinder |

Correct Answer: A B C D

Explanation:

.....

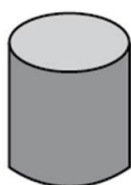
.....

.....

.....

.....

.....



What is the name of this shape?

- | | | | |
|-------------------------|--------|-------------------------|----------|
| <input type="radio"/> A | Sphere | <input type="radio"/> B | Circle |
| <input type="radio"/> C | Cone | <input type="radio"/> D | Cylinder |

Correct Answer: A B C D

Explanation:

.....

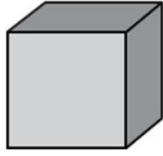
.....

.....

.....

.....

.....



What is the name of this shape?

- | | | | |
|----------------------------|--------|----------------------------|-----------|
| <input type="checkbox"/> A | Cube | <input type="checkbox"/> B | Square |
| <input type="checkbox"/> C | Cuboid | <input type="checkbox"/> D | Rectangle |

Correct Answer: A B C D

Explanation:

.....

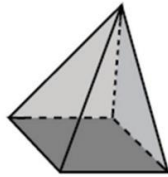
.....

.....

.....

.....

.....



What is the name of this shape?

- | | | | |
|----------------------------|------------------|----------------------------|----------------------|
| <input type="checkbox"/> A | Triangular Prism | <input type="checkbox"/> B | Square based pyramid |
| <input type="checkbox"/> C | Cone | <input type="checkbox"/> D | Rectangular Prism |

Correct Answer: A B C D

Explanation:

.....

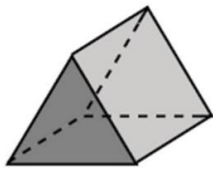
.....

.....

.....

.....

.....



What is the name of this shape?

- | | | | |
|----------------------------|------------------|----------------------------|-------------------|
| <input type="checkbox"/> A | Triangular Prism | <input type="checkbox"/> B | Triangle |
| <input type="checkbox"/> C | Pyramid | <input type="checkbox"/> D | Rectangular Prism |

Correct Answer: A B C D

Explanation:

.....


.....

.....

.....

.....

.....



What is the name of this shape?

- | | | | |
|----------------------------|------------------|----------------------------|--------------------------|
| <input type="checkbox"/> A | Triangular Prism | <input type="checkbox"/> B | Cone |
| <input type="checkbox"/> C | Triangle | <input type="checkbox"/> D | Triangular based Pyramid |

Correct Answer: A B C D

Explanation:

.....

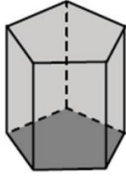
.....

.....

.....

.....

.....



What is the name of this shape?

- ☐ A Hexagonal Prism ☐ B Pentagonal Prism
☐ C Octagonal Prism ☐ D Rectangular Prism

Correct Answer: A B C D

Explanation:

.....

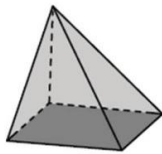
.....

.....

.....

.....

.....



What is the name of this shape?

- ☐ A Square based Pyramid ☐ B Rectangular based Pyramid
☐ C Rectangle Prism ☐ D Square Prism

Correct Answer: A B C D

Explanation:

.....

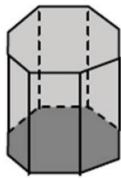
.....

.....

.....

.....

.....



What is the name of this shape?

- ☐ A Hexagonal Prism ☐ B Pentagonal Prism
☐ C Octagonal Prism ☐ D Rectangular Prism

Correct Answer: A B C D

Explanation:

.....

.....

.....

.....

.....

.....